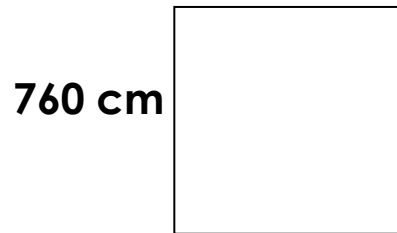


Find the perimeter of
the rectangle




760 cm

B**U****I****L****D**
on
M**A****T****H**

Trouve le périmètre D

Find the perimeter of
the rectangle



950 cm

B**U****I****L****D**
on
M**A****T****H**

Trouve le périmètre D

Find the perimeter of
the rectangle




950 cm

B**U****I****L****D**
on
M**A****T****H**

Trouve le périmètre D

Find the perimeter of
the rectangle

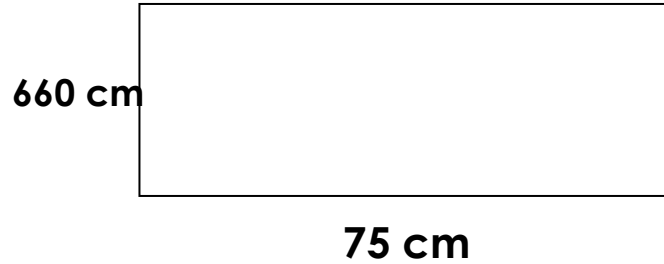


970 cm

B**U****I****L****D**
on
M**A****T****H**

Trouve le périmètre D

Find the perimeter of
the rectangle



Trouve le périmètre D

B **U** **I** **L** **D**
on
M **A** **T** **H**

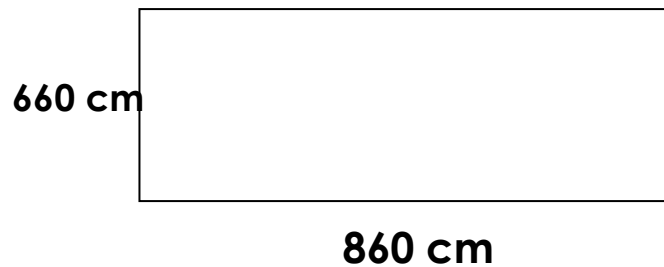
Find the perimeter of
the rectangle



Trouve le périmètre D

B **U** **I** **L** **D**
on
M **A** **T** **H**

Find the perimeter of
the rectangle



Trouve le périmètre D

B **U** **I** **L** **D**
on
M **A** **T** **H**

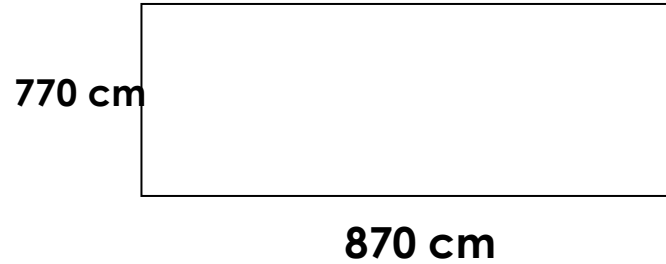
Find the perimeter of
the rectangle



Trouve le périmètre D

B **U** **I** **L** **D**
on
M **A** **T** **H**

Find the perimeter of
the rectangle



Trouve le périmètre D

B **U** **I** **L** **D**
on
M **A** **T** **H**


Find the perimeter of
the rectangle



Trouve le périmètre D

B **U** **I** **L** **D**
on
M **A** **T** **H**

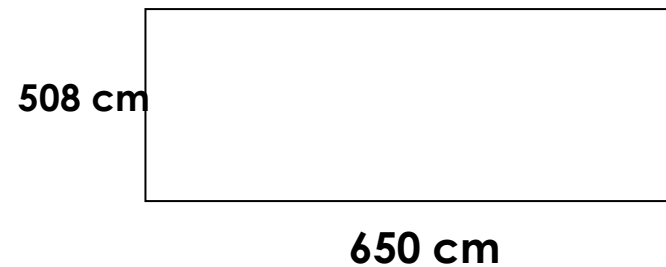
Find the perimeter of
the rectangle



Trouve le périmètre D

B **U** **I** **L** **D**
on
M **A** **T** **H**


Find the perimeter of
the rectangle



Trouve le périmètre D

B **U** **I** **L** **D**
on
M **A** **T** **H**

Find the perimeter of
the rectangle



Trouve le périmètre D

BUILD
on
MATH

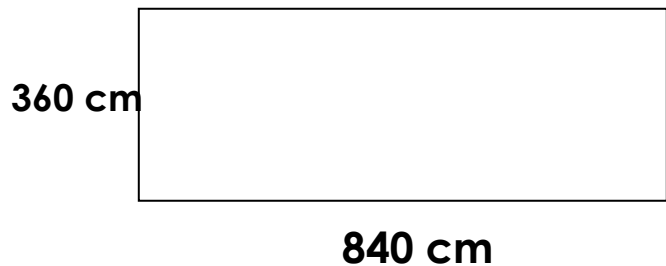
Find the perimeter of
the rectangle



Trouve le périmètre D

BUILD
on
MATH

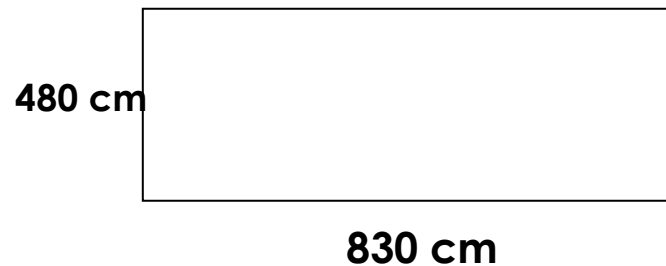
Find the perimeter of
the rectangle



Trouve le périmètre D

BUILD
on
MATH

Find the perimeter of
the rectangle



Trouve le périmètre D

BUILD
on
MATH

Find the perimeter of
the rectangle



Trouve le périmètre D

B **U** **I** **L** **D**
on
M **A** **T** **H**

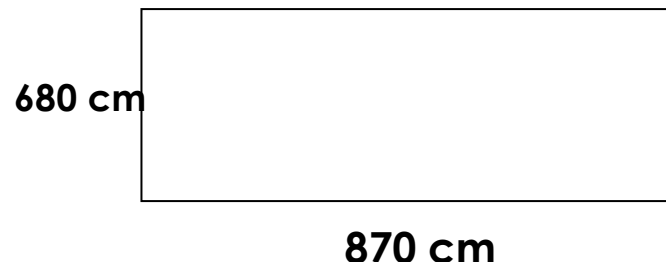
Find the perimeter of
the rectangle



Trouve le périmètre D

B **U** **I** **L** **D**
on
M **A** **T** **H**

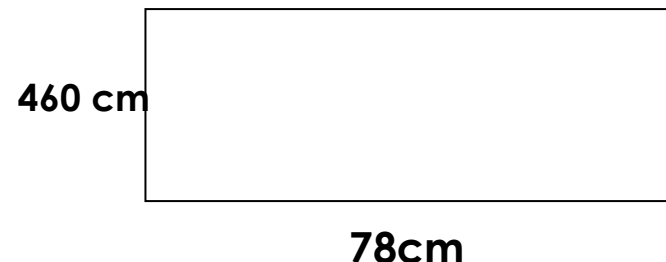
Find the perimeter of
the rectangle



Trouve le périmètre D

B **U** **I** **L** **D**
on
M **A** **T** **H**

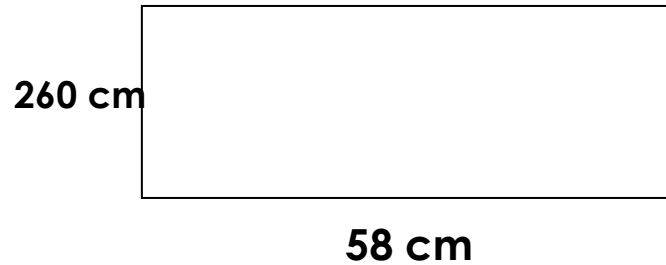
Find the perimeter of
the rectangle



Trouve le périmètre D

B **U** **I** **L** **D**
on
M **A** **T** **H**

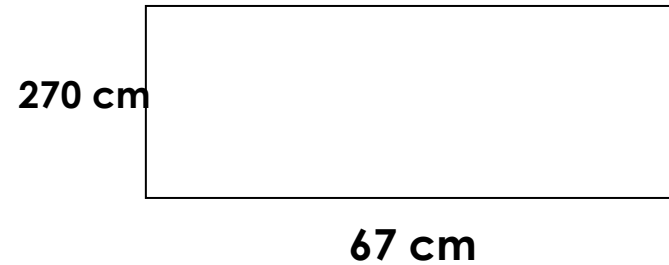
Find the perimeter of
the rectangle



Trouve le périmètre D

B **U** **I** **L** **D**
on
M **A** **T** **H**

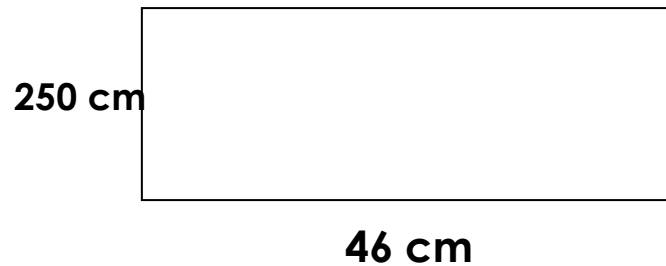
Find the perimeter of
the rectangle



Trouve le périmètre D

B **U** **I** **L** **D**
on
M **A** **T** **H**

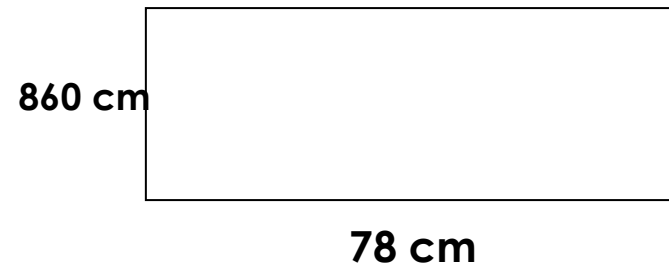
Find the perimeter of
the rectangle



Trouve le périmètre D

B **U** **I** **L** **D**
on
M **A** **T** **H**

Find the perimeter of
the rectangle



Trouve le périmètre D

B **U** **I** **L** **D**
on
M **A** **T** **H**

