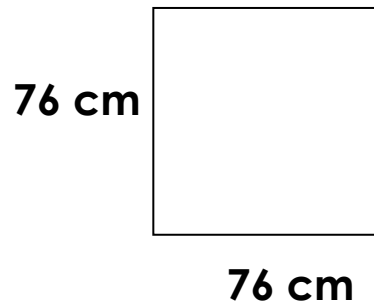


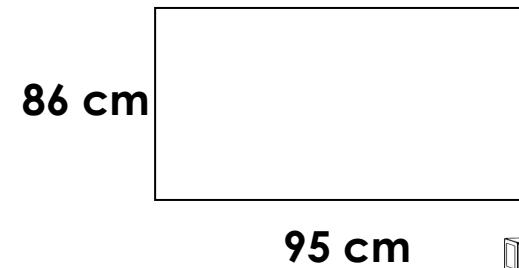
Find the perimeter of  
the rectangle



Trouve le périmètre C

**BUILD**  
on  
**MATH**

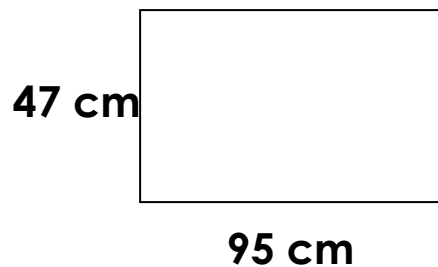
Find the perimeter of  
the rectangle



Trouve le périmètre C

**BUILD**  
on  
**MATH**


Find the perimeter of  
the rectangle



Trouve le périmètre C

**BUILD**  
on  
**MATH**

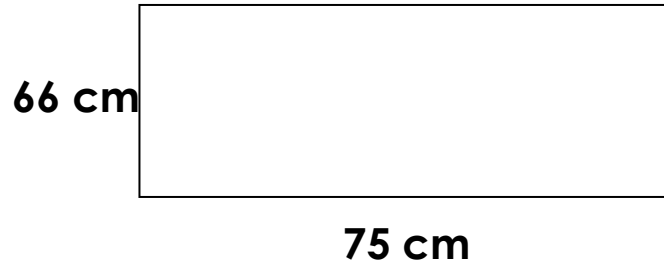
Find the perimeter of  
the rectangle



Trouve le périmètre C

**BUILD**  
on  
**MATH**

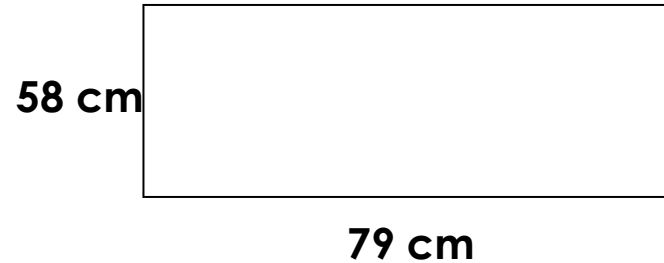
Find the perimeter of  
the rectangle



Trouve le périmètre C

**B** **U** **I** **L** **D**  
on  
**M** **A** **T** **H**

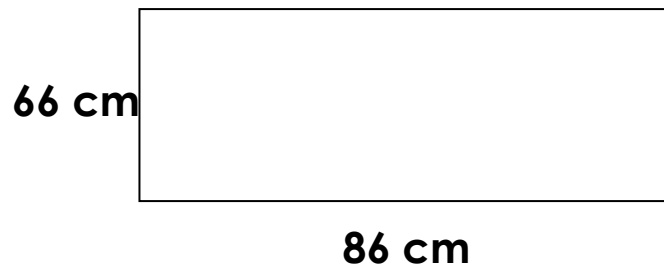
Find the perimeter of  
the rectangle



Trouve le périmètre C

**B** **U** **I** **L** **D**  
on  
**M** **A** **T** **H**

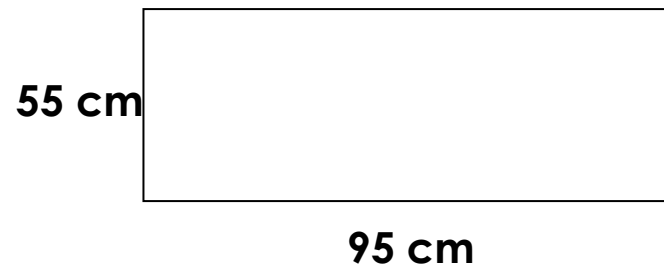
Find the perimeter of  
the rectangle



Trouve le périmètre C

**B** **U** **I** **L** **D**  
on  
**M** **A** **T** **H**

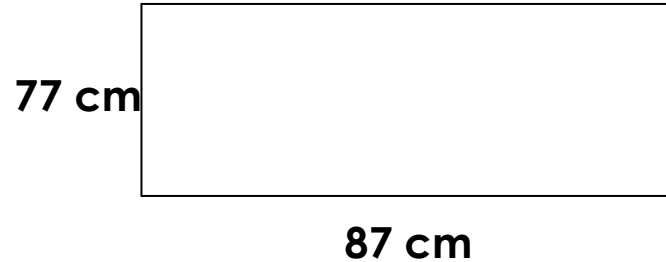
Find the perimeter of  
the rectangle



Trouve le périmètre C

**B** **U** **I** **L** **D**  
on  
**M** **A** **T** **H**

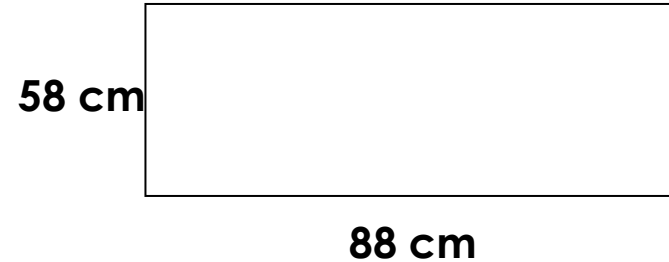
Find the perimeter of  
the rectangle



Trouve le périmètre C

**B** **U** **I** **L** **D**  
on  
**M** **A** **T** **H**

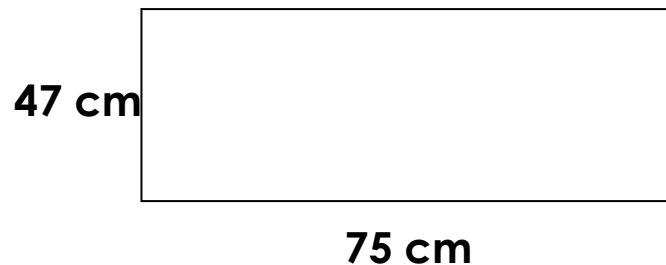
Find the perimeter of  
the rectangle



Trouve le périmètre C

**B** **U** **I** **L** **D**  
on  
**M** **A** **T** **H**

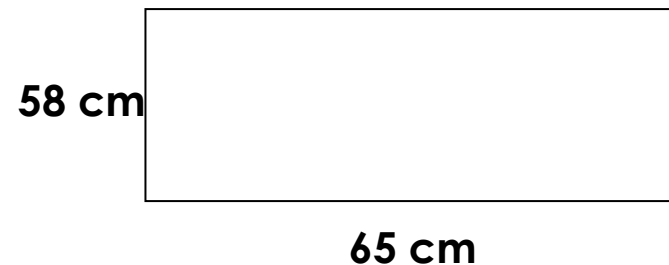
Find the perimeter of  
the rectangle



Trouve le périmètre C

**B** **U** **I** **L** **D**  
on  
**M** **A** **T** **H**

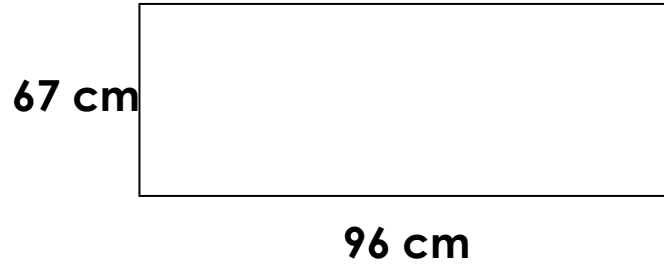
Find the perimeter of  
the rectangle



Trouve le périmètre C

**B** **U** **I** **L** **D**  
on  
**M** **A** **T** **H**

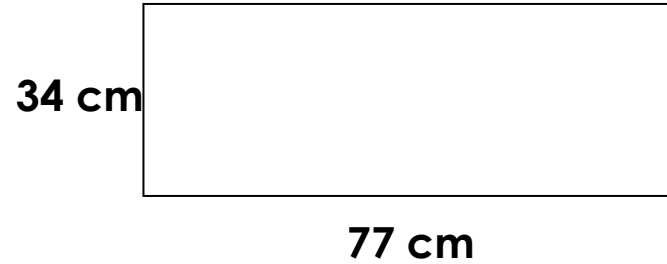
Find the perimeter of  
the rectangle



Trouve le périmètre C

**B** **U** **I** **L** **D**  
on  
**M** **A** **T** **H**

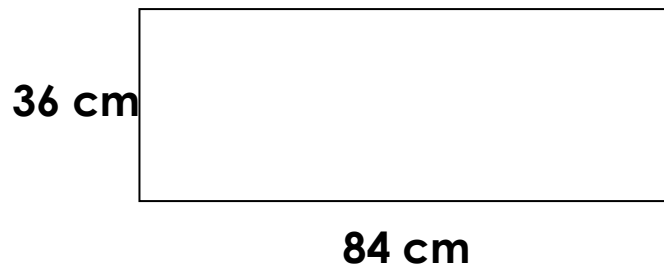
Find the perimeter of  
the rectangle



Trouve le périmètre C

**B** **U** **I** **L** **D**  
on  
**M** **A** **T** **H**

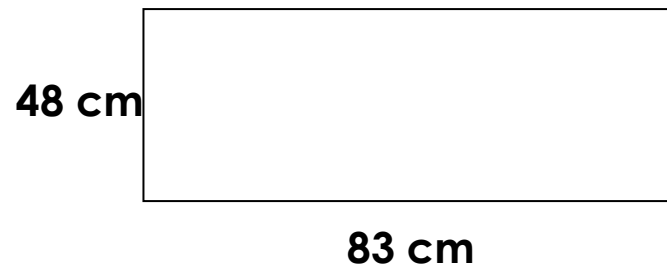
Find the perimeter of  
the rectangle



Trouve le périmètre C

**B** **U** **I** **L** **D**  
on  
**M** **A** **T** **H**

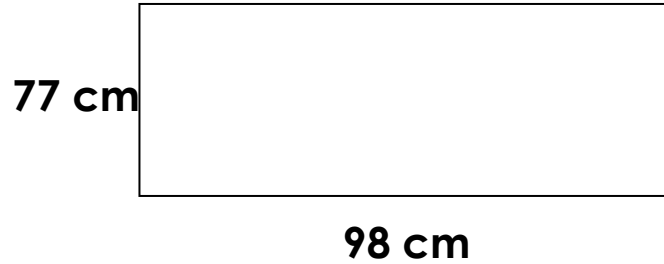
Find the perimeter of  
the rectangle



Trouve le périmètre C

**B** **U** **I** **L** **D**  
on  
**M** **A** **T** **H**

Find the perimeter of  
the rectangle



Trouve le périmètre C

**B** **U** **I** **L** **D**  
on  
**M** **A** **T** **H**

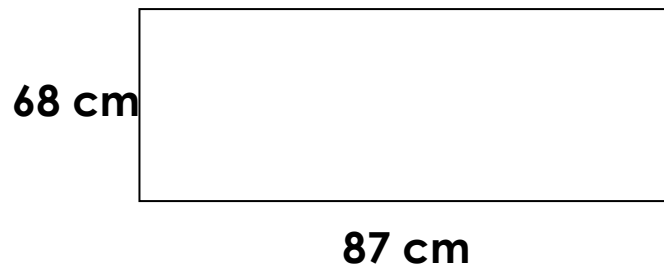
Find the perimeter of  
the rectangle



Trouve le périmètre C

**B** **U** **I** **L** **D**  
on  
**M** **A** **T** **H**

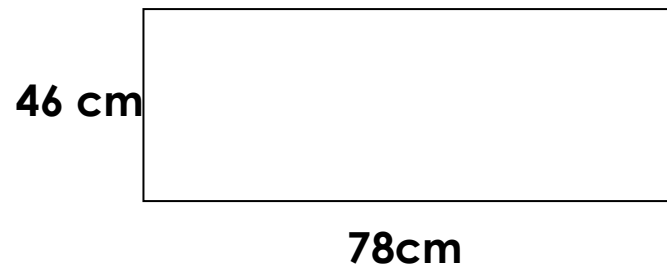
Find the perimeter of  
the rectangle



Trouve le périmètre C

**B** **U** **I** **L** **D**  
on  
**M** **A** **T** **H**

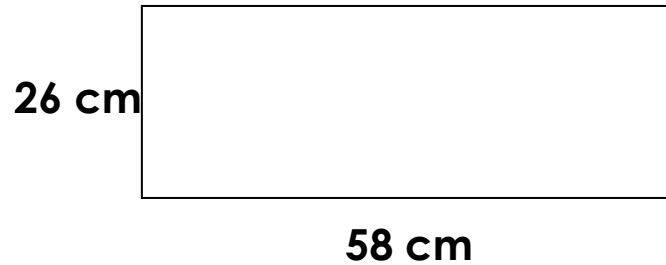
Find the perimeter of  
the rectangle



Trouve le périmètre C

**B** **U** **I** **L** **D**  
on  
**M** **A** **T** **H**

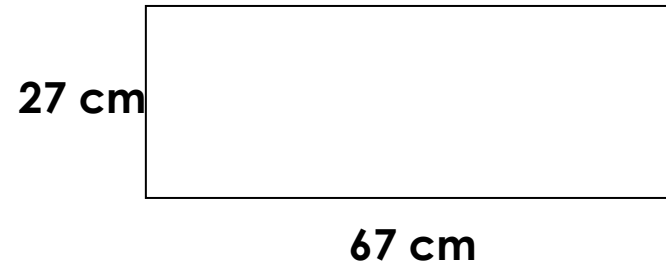
Find the perimeter of  
the rectangle



Trouve le périmètre C

**B** **U** **I** **L** **D**  
on  
**M** **A** **T** **H**

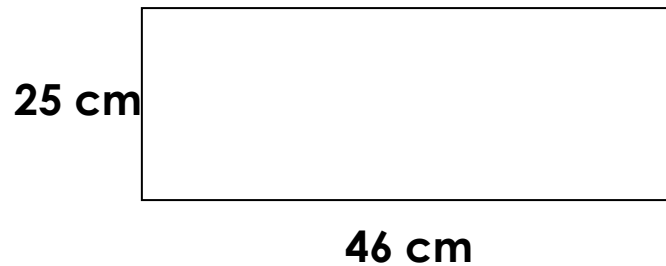
Find the perimeter of  
the rectangle



Trouve le périmètre C

**B** **U** **I** **L** **D**  
on  
**M** **A** **T** **H**

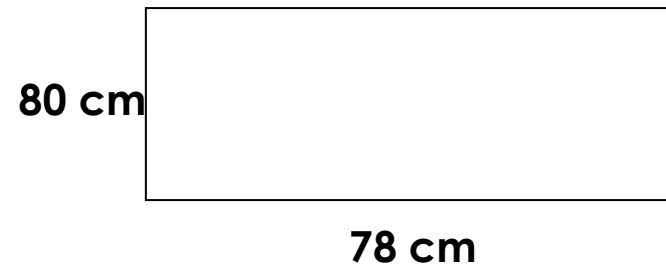
Find the perimeter of  
the rectangle



Trouve le périmètre C

**B** **U** **I** **L** **D**  
on  
**M** **A** **T** **H**

Find the perimeter of  
the rectangle



Trouve le périmètre C

**B** **U** **I** **L** **D**  
on  
**M** **A** **T** **H**

