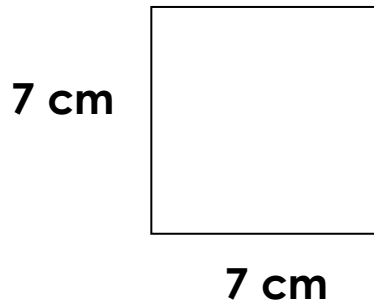


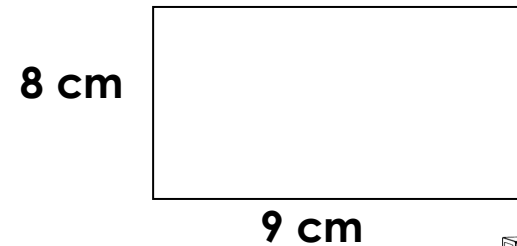
Find the perimeter of  
the rectangle



**BUILD**  
on  
**MATH**

Trouve le périmètre A

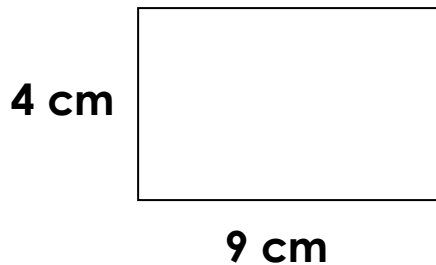
Find the perimeter of  
the rectangle



**BUILD**  
on  
**MATH**

Trouve le périmètre A

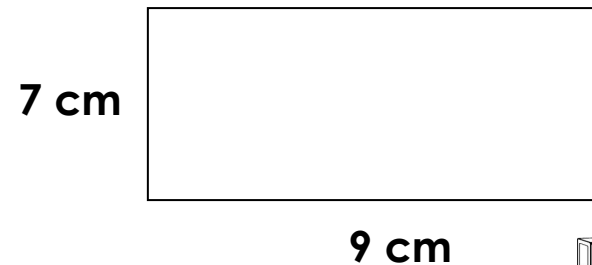
Find the perimeter of  
the rectangle



**BUILD**  
on  
**MATH**

Trouve le périmètre A

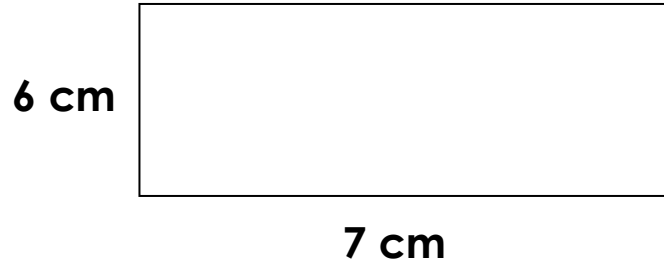
Find the perimeter of  
the rectangle



**BUILD**  
on  
**MATH**

Trouve le périmètre A

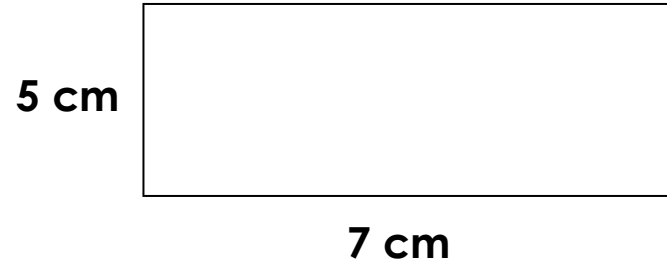
Find the perimeter of  
the rectangle



Trouve le périmètre A

**B** **U** **I** **L** **D**  
on  
**M** **A** **T** **H**

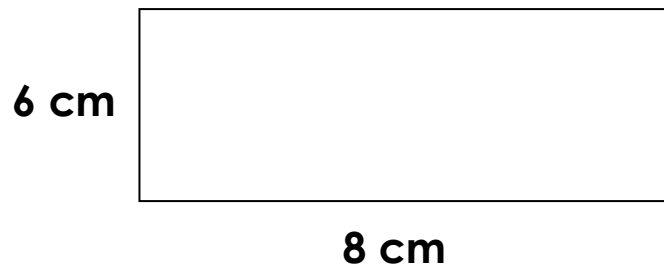
Find the perimeter of  
the rectangle



Trouve le périmètre A

**B** **U** **I** **L** **D**  
on  
**M** **A** **T** **H**

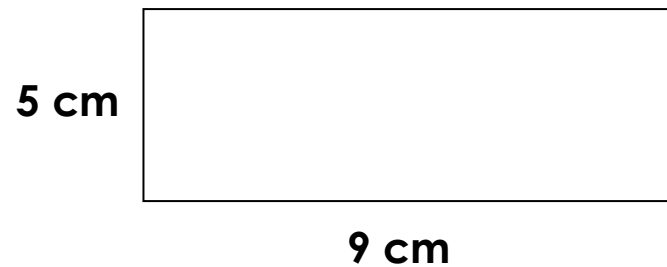
Find the perimeter of  
the rectangle



Trouve le périmètre A

**B** **U** **I** **L** **D**  
on  
**M** **A** **T** **H**

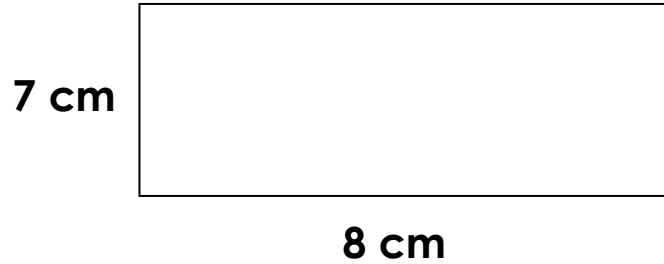
Find the perimeter of  
the rectangle



Trouve le périmètre A

**B** **U** **I** **L** **D**  
on  
**M** **A** **T** **H**

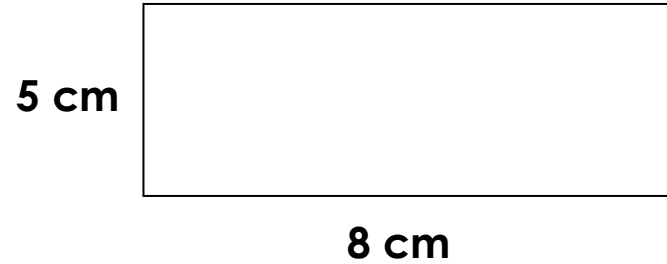
Find the perimeter of  
the rectangle



Trouve le périmètre A

**B** **U** **I** **L** **D**  
on  
**M** **A** **T** **H**

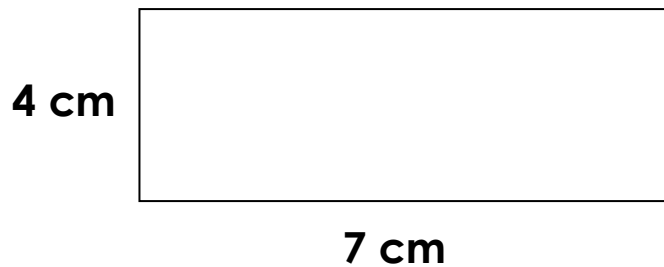
Find the perimeter of  
the rectangle



Trouve le périmètre A

**B** **U** **I** **L** **D**  
on  
**M** **A** **T** **H**

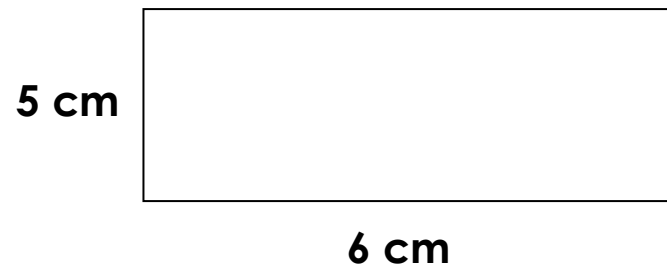
Find the perimeter of  
the rectangle



Trouve le périmètre A

**B** **U** **I** **L** **D**  
on  
**M** **A** **T** **H**

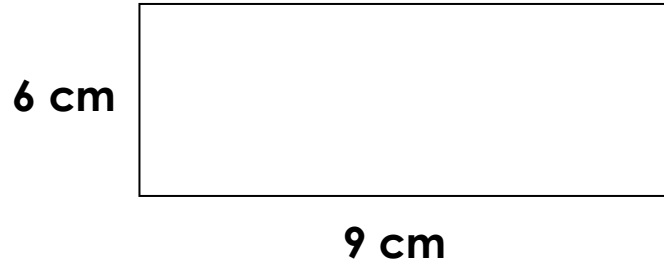
Find the perimeter of  
the rectangle



Trouve le périmètre A

**B** **U** **I** **L** **D**  
on  
**M** **A** **T** **H**

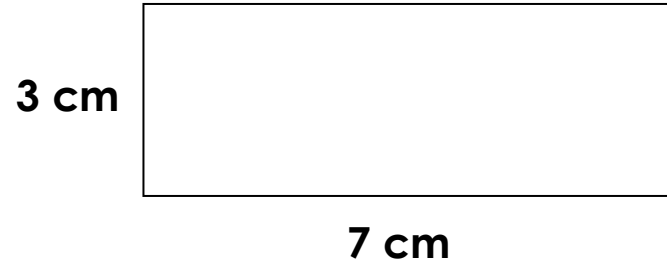
Find the perimeter of  
the rectangle



Trouve le périmètre A

**B** **U** **I** **L** **D**  
on  
**M** **A** **T** **H**

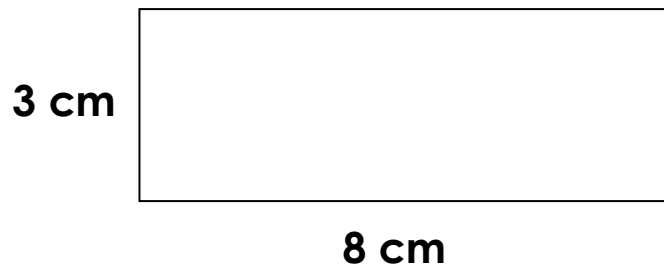
Find the perimeter of  
the rectangle



Trouve le périmètre A

**B** **U** **I** **L** **D**  
on  
**M** **A** **T** **H**

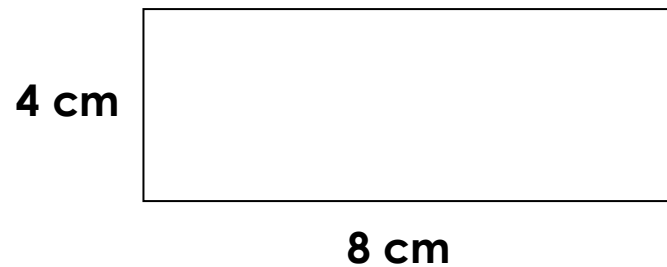
Find the perimeter of  
the rectangle



Trouve le périmètre A

**B** **U** **I** **L** **D**  
on  
**M** **A** **T** **H**

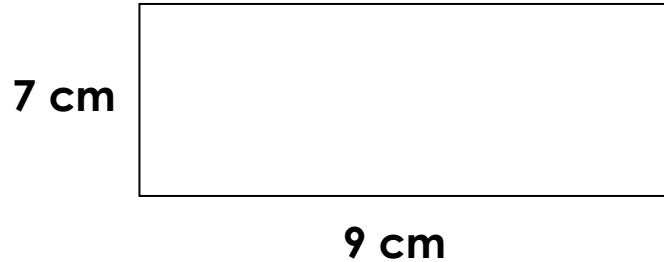
Find the perimeter of  
the rectangle



Trouve le périmètre A

**B** **U** **I** **L** **D**  
on  
**M** **A** **T** **H**

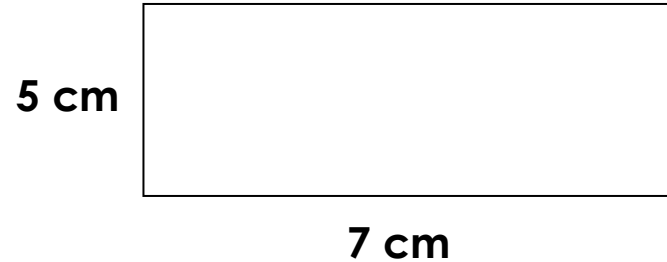
Find the perimeter of  
the rectangle



Trouve le périmètre A

**B** **U** **I** **L** **D**  
on  
**M** **A** **T** **H**

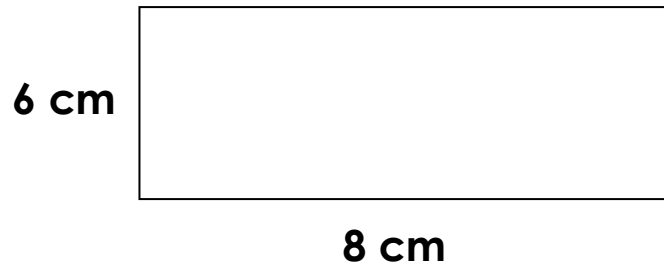
Find the perimeter of  
the rectangle



Trouve le périmètre A

**B** **U** **I** **L** **D**  
on  
**M** **A** **T** **H**

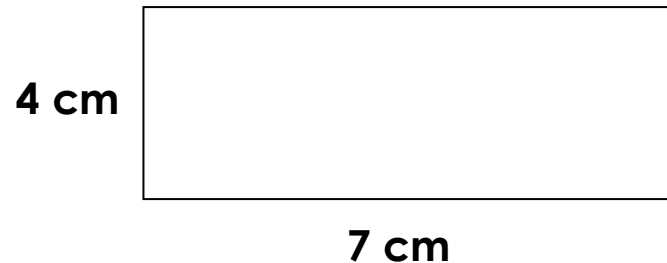
Find the perimeter of  
the rectangle



Trouve le périmètre A

**B** **U** **I** **L** **D**  
on  
**M** **A** **T** **H**

Find the perimeter of  
the rectangle



Trouve le périmètre A

**B** **U** **I** **L** **D**  
on  
**M** **A** **T** **H**

Find the perimeter of  
the rectangle

2 cm




5 cm

Trouve le périmètre A



Find the perimeter of  
the rectangle

2 cm



6 cm

Trouve le périmètre A



Find the perimeter of  
the rectangle

2 cm



4 cm

Trouve le périmètre A



Find the perimeter of  
the rectangle

2 cm



7 cm

Trouve le périmètre A



